

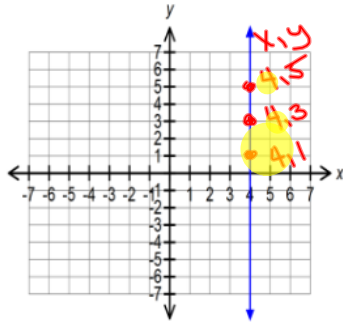
Name: _____

Remediation – Stating Equation of Vertical & Horizontal Lines ($x = a$ & $y = b$)

After you have watched the video from the wiki, you should try the following problems and then use the key to check your work.

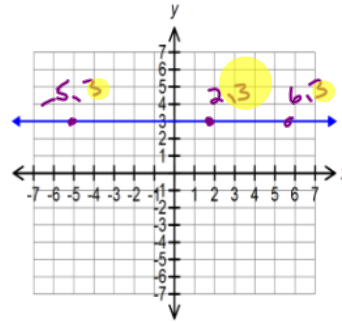
Directions: Please state the slope-intercept equation of the following lines.

1. $x = 4$



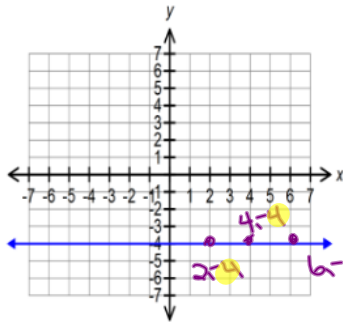
vert
 $x = \#$

2. $y = 3$



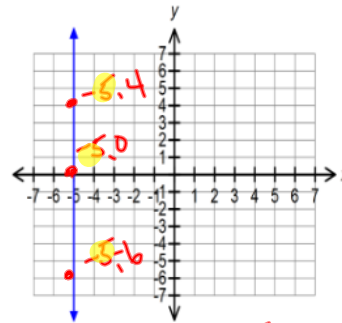
hor
 $y = \#$

3. $y = -4$



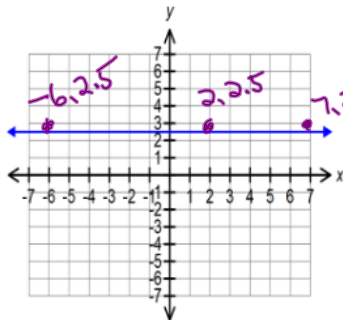
hor
 $y = \#$

4. $x = -5$



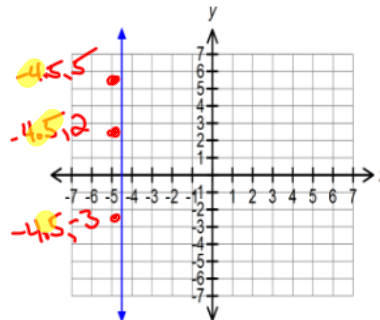
vert
 $x = \#$

5. $y = 2.5$



hor
 $y = \#$

6. $x = -4.5$



vert
 $x = \#$